

NAAM: _____



LEES, SPEL EN WISKUNDE

REMEDIERING

MARLENE VAN DER BERG

WWW.LEERAFRIKAANS123.CO.ZA

info@leerafrikaans123.co.za

Die muis in die huis.



In ons huis bly 'n muis.

Ek hoor hom op die dak.

Ek hoor hom in die kas.

Hy soek kos om te eet.



Hy hap my rok in die kas.



Hy kou my pa se das.

Hy eet die kaas op die rak!



Hy hap my rok.

Hy eet ons baba se

doek.



Hy eet die boek wat my

ma wil lees.



Hy eet als!

Ek hou nie van die muis

in ons huis nie.

De	ma	n
de	ma	In
om	ly	n
R	noor	nom
o	ak	ko
ly	boek	ko
om	to	oet
hou	ny	wa
ee	de	rap
rok	doek	boek
bee	wat	ma
w	om	baba
de	hou	van
ne	ko	rok

De muus in ons huis

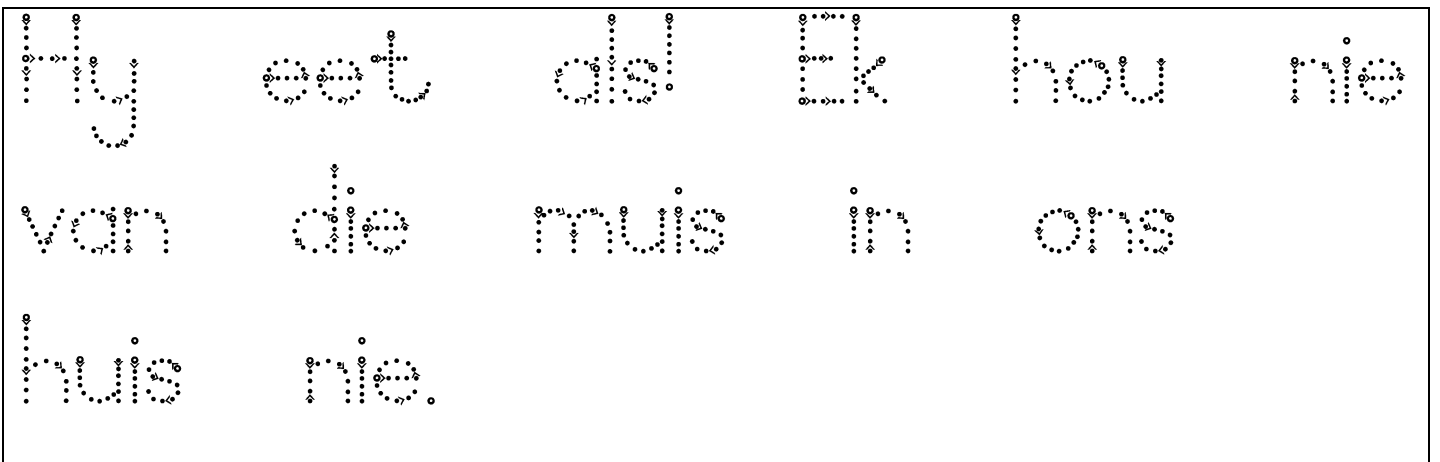
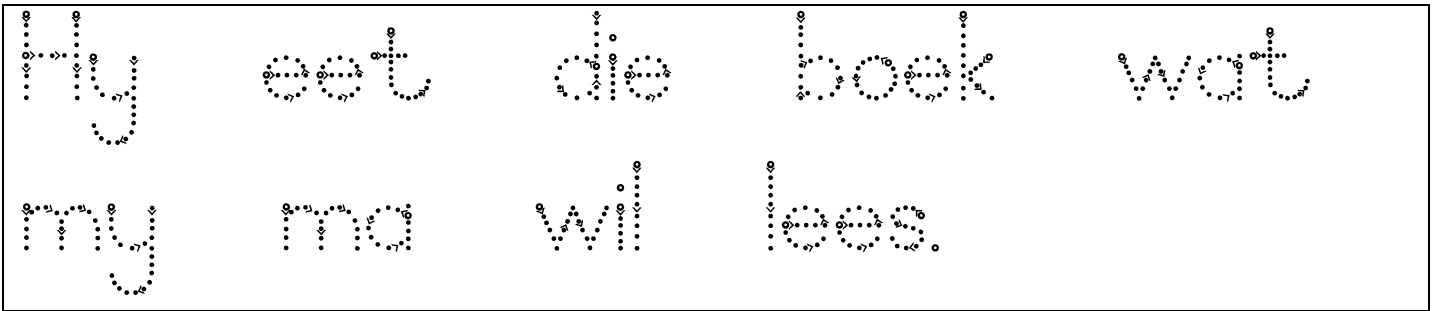
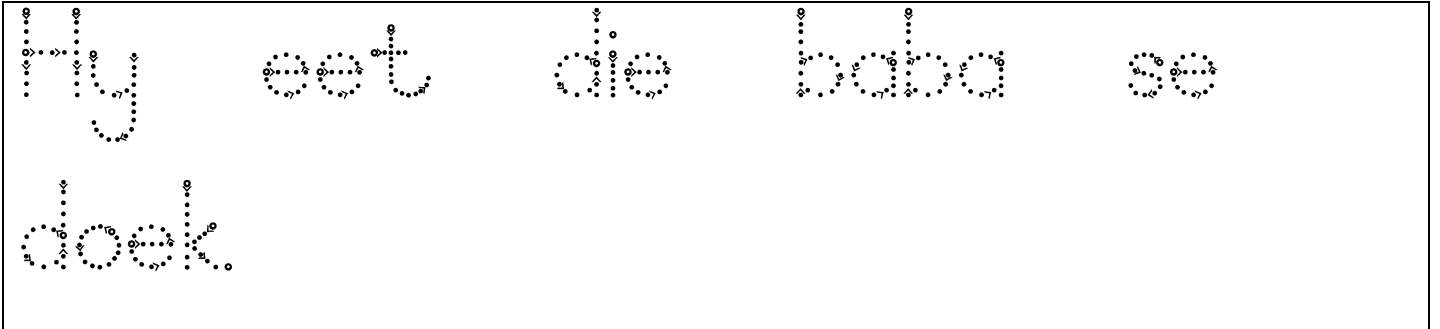
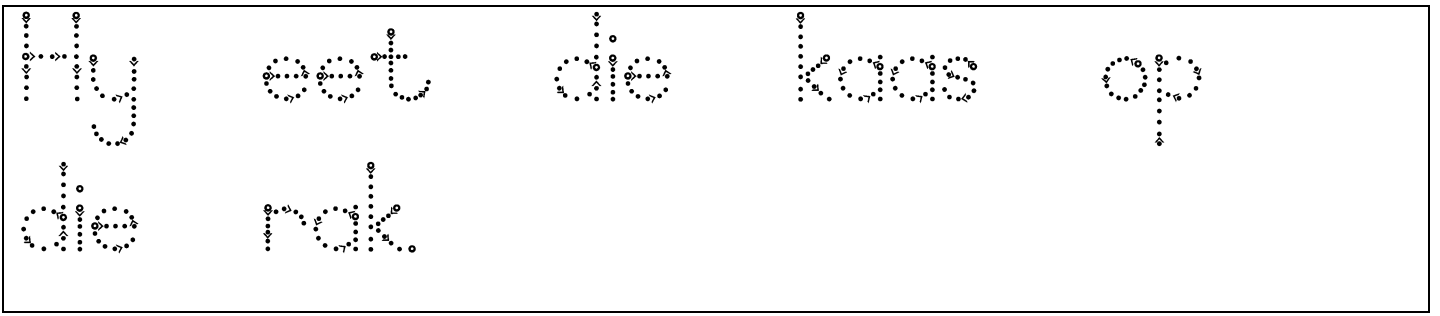
In ons huis
by n
muus

Ik hoor hem op de
dak

Ik hoor hem in de
kas

Hy het my
rook in die
kas

Hy bou my
pa se
dies



Watter sin pas by elkeen van die prente?



Hy eet die boek wat my ma wil lees.



Ek hoor hom in die kas.



Hy hap my rok in die kas.



Ek hoor hom op die dak.



Hy eet ons baba se doek.

-oe-woorde

boek		
groet		
broek		
soek		
doek		
koek		
roep		
vloer		

Die boek is op die


vloer.


Ek soek my boek.


Die baba se doek is


nat.


Wiskunde


$14 + 4 = \underline{\quad}$


$5 + 3 = \underline{\quad}$



$2 + 4 = \underline{\quad}$



$8 + 3 = \underline{\quad}$


$9 + 4 = \underline{\quad}$



$9 + 5 = \underline{\quad}$



$9 + 7 = \underline{\quad}$



$5 + 5 = \underline{\quad}$



$10 + 4 = \underline{\quad}$



$15 + 3 = \underline{\quad}$



$5 + 3 = \underline{\quad}$



$3 + 2 = \underline{\quad}$



$4 + 3 = \underline{\quad}$



$6 + 2 = \underline{\quad}$



$9 + 3 = \underline{\quad}$



$6 + 3 = \underline{\quad}$



$7 + 5 = \underline{\quad}$


$2 + 5 = \underline{\quad}$


$10 + 3 = \underline{\quad}$


$13 + 2 = \underline{\quad}$


$14 + 3 = \underline{\quad}$


$4 + 3 = \underline{\quad}$


$14 - 4 = \underline{\quad}$



$5 - 3 = \underline{\quad}$



$4 - 2 = \underline{\quad}$



$8 - 3 = \underline{\quad}$



$9 - 4 = \underline{\quad}$



$5 - 3 = \underline{\quad}$



$7 - 6 = \underline{\quad}$



$5 - 5 = \underline{\quad}$



$12 - 4 = \underline{\quad}$



$12 - 5 = \underline{\quad}$



$3 - 3 = \underline{\quad}$



$3 - 2 = \underline{\quad}$



$4 - 3 = \underline{\quad}$



$6 - 2 = \underline{\quad}$



$9 - 3 = \underline{\quad}$



$6 - 3 = \underline{\quad}$



$7 - 5 = \underline{\quad}$



$5 - 1 = \underline{\quad}$



$12 - 3 = \underline{\quad}$



$12 - 6 = \underline{\quad}$



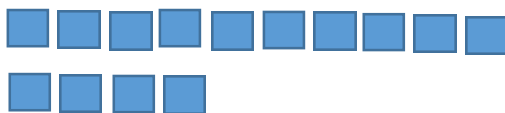
$3 - 2 = \underline{\quad}$




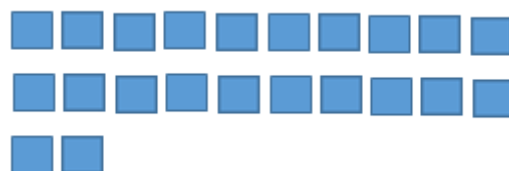
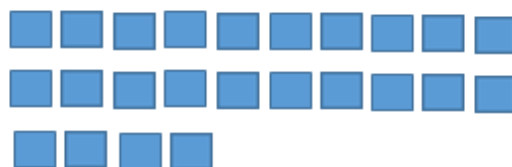
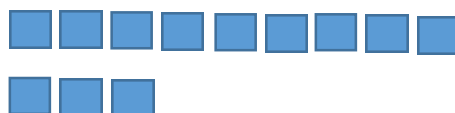
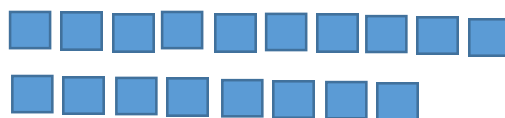
$6 - 2 = \underline{\quad}$



Tel die blokkies



14



• Rangskik nou die getalle van groot tot klein.

•	•	•	•	•	•	•
---	---	---	---	---	---	---